



## II Semester B.Com. Degree Examination, April/May 2019

(Credit Based Semester Scheme)

(2016-17 Batch Onwards)

### Financial Accounting - II

Time : 3 Hours]

[Max. Marks : 120

**Instructions :** Provide working notes wherever necessary.


#### SECTION - A

Answer **any four** questions :

(4 × 6 = 24)

- Give the meaning of
  - Account Sales
  - Del-credre commission.
- State the difference between hire purchase system and installment system.
- From the following calculate total sales :

	Rs.
Opening debtors	15,000
Closing debtors	18,000
Cash received from debtors	30,000
Sales return	2,000
B/R received during the year	16,000
Bad debts written off	1,000
Cash sales	25,000
Provision for doubtful debts	500





4. A fire occurred in the premises of Anand & Co., on 1<sup>st</sup> September, 2018 stock of the value of Rs. 1,01,000 was salvaged and the business books records were saved. The following information was obtained :

	Rs.
Purchase for the year ended 31.3.2018	6,80,000
Sales for the year ended 31.3.2018	11,00,000
Purchases from 1.4.2018 to 1.9.2018	2,50,000
Sales from 1.4.2018 to 1.9.2018	3,60,000
Stock on 1.4.2017	3,00,000
Stock on 31.3.2018	3,40,000

Further information is that the stock on 31.3.2018 was overvalued Rs.20,000. Calculate the amount of the claims to be presented to Insurance Co., in respect of the loss.

5. Kiran purchased a T.V. on 1.1.2015 on the hire purchases system. The payment is to be made as follows :

Rs. 4,000 on delivery. Rs. 7,600 at the end of the first year, Rs. 6,000 at the end of the second year and Rs. 5,500 at the end of the third year. Interest 10% p.a. is included in these installments.

Find out cash price of the T.V.

6. On 1<sup>st</sup> January 2019, Heera drew a 2 months bill on Meera for Rs. 10,000. The letter accepted the same. On the due date, the bill was dishonoured. Noting charges of Rs. 100 are paid.

Pass journal entries in the books of both the parties.

**SECTION - B**

Answer **any four** questions :

(4 × 12)

7. What are the merits and demerits of single entry system?
8. From the details of consignment given below you are required to prepare consignment account, consignee's account and abnormal loss account in the books of consignor.
- (a) 10000 litres of nitric acid at Rs. 200 per litre sent to consignee
- (b) Freight Rs. 5,000 and insurance Rs. 5,000 paid by the consignor



- (c) Consignee has spent Rs. 10,000 on selling. He is also entitled to 5% commission on sales
- (d) 2000 litres of acid was lost in transit due to breakage of jars. The insurance company admitted the claim for Rs. 35,000
- (e) Sales – 5,700 litres at Rs. 250 per litre
- (f) The consignee has reported a loss of 400 litres due to leakage.

9. Uday purchased a motor car from Nayak Motors on 1<sup>st</sup> January 2015 on installment system. The payment is to be made as follows :

Rs. 80,000 on delivery, Rs. 1,52,000 at the end of the first year, Rs. 1,20,000 at end of second year and Rs. 1,10,000 at the end of the third year. Interest @ 10% p.a. is included in these installments. Uday charged depreciation on the car at 20% p.a. on the diminishing balance.

You are required to prepare Nayak motor account, motor car account and interest suspense account in the books of Uday.

10. Manoj purchased a machine under hire purchase system from Pankaj. The cash price of the machine was Rs. 15,500. The payment for the purchase is to be made as under :

	Rs.
On signing the contract	3,000
End of the first year	5,000
End of the second year	5,000
End of the third year	5,000

Manoj has decided to charge depreciation at the rate of 10% p.a. on the diminishing balance of the cash price.

Prepare Machinery A/c and Pankaj A/c in the books of Manoj.

11. A fire occurred in the premises of a company on 1.7.2018. From the following information, calculate the claim.

	Rs.
Stock on 1.1.2017	63,000
Purchases for the year ending 31.12.2017	4,00,000
Sales for the year ending 31.12.2017	5,00,000
Wages for the year ending 31.12.2017	20,000
Stock on 31.12.2017	81,000



	Rs.
Purchases from 1.1.2018 to the date of fire	2,00,000
Sales from 1.1.2018 to the date of fire	3,00,000
Stock salvaged	10,000
Value of policy	30,000

There is an average clause in the policy. It is the practice of the company value the stock at 10% less than the cost.

12. Arun draws a bill on Bharath for Rs. 50,000 and Bharath accepts it and returns it to Arun. Arun endorses it to Chethan, who later endorses it to Dinesh. Dinesh discounts the same with his banker and receives Rs. 49,500. The bill is dishonoured on the due date and the noting charges incurred to the banker is Rs. 250.

Pass the necessary entries in the books of Arun, Bharath, Chethan and Dinesh assuming the bill is taken up by Arun on dishonour.

SECTION - C

Answer **any two** questions :

(2 × 24 =

13. From the following information relating to Mahesh who keeps his books on single entry system, prepare trading and profit and loss account for the year ending 31.12.2018 and a balance sheet as on that date :

	1.1.2018	31.12.2018
	Rs.	Rs.
Creditors	18,000	?
Furniture	8,000	8,000
Debtors	?	55,000
Stock	12,000	10,500
Cash	24,000	?

Other particulars :

	Rs.
Receipts from debtors	1,75,000
Paid to creditors	90,000
Total sales. (including cash sales Rs. 38,000)	2,25,000



	Rs.
Total purchases (including cash purchases Rs. 23,000)	1,20,000
Sales returns	2,000
Purchases returns	1,500
Drawings	20,000
Bad debts	1,000
Discount allowed	3,000
Discount received	2,500
Rent	8,000
Wages	3,000
Trade expenses	2,000
Salary	5,000
Office expenses	3,000
Outstanding salary	500
Prepaid rent	800
Depreciate furniture by 10%.	

14. Mr. Chandra dispatched 100 tea boxes costing Rs. 1,500 each at 20% above cost to their agent Mr. Prakash of Poona. He paid Rs. 5,000 for packing and Rs. 2,000 as freight. He draws an advance bill of Rs. 50,000. 10 boxes were destroyed in transit and an amount of Rs. 10,000 was received by the consignor from the Insurance Co.

Mr. Prakash received the consignment and paid the following expenses :

Rs. 1,000 for unloading, Rs. 500 for carriage to godown.

Mr. Prakash sold 60 boxes at Rs. 2,100 each and 20 boxes at Rs. 2,000 each.

He is entitled to commission of 10% on sales including delcredere commission of 2%. Prakash remitted the balance by bank draft.

Prepare ledger accounts in the books of both the parties.

## BCMCMC 159



15. On 1.4.2018, Amar accepts a three months bills drawn by his creditor Ashok for Rs. 1,00,000. On 5.5.2018, Ashok discounts the same at 5% p.a. Amar being unable to meet the bill at maturity, requests Ashok to accept Rs. 40,000 in cash and to draw another bill for three months for the balance sum plus interest at 7% p.a. and Ashok agrees. But before the second bill maturity Amar becomes insolvent and is unable to pay any amount whatsoever.

Show the journal entries in the books of both the parties.

16. M/s. SRR traders purchased from Vikram Motors Company, 3 trucks costing Rs. 6,00,000 each on hire purchase systems. Payment was to be made Rs. 3,60,000 down and the remainder in 3 equal annual installments plus interest at 9% p.a. M/s SRR traders write off depreciation at 20% p.a. on diminishing balance. They paid the 1<sup>st</sup> installment but could not pay the 2<sup>nd</sup>. Vikram Motor Company agreed to leave one truck with M/s SRR traders adjusting the value of other 2 trucks against the amount due. The trucks were valued on the basis of 30% depreciation p.a. on the written down value.

Show the necessary ledger accounts in the books of both the parties for 3 years.

6



## II Semester B.Com. Degree Examination, April/May 2019

(Credit Based Semester Scheme)

(2015-16 Earlier Batches)

### FINANCIAL ACCOUNTING – II

Time : 3 Hours]

[Max. Marks : 120

**Instructions :** Provide working notes wherever necessary.

#### SECTION – A

Answer **any four** questions :

(4 × 6 = 24)

1. Explain the different types of commission paid to the consignee in consignment.
2. From the following information prepare the total debtors account :

	₹
Opening debtors	60,000
Cash received from debtors	5,40,000
Cheque received from debtors	75,000
B/R received during the year	15,000
B/R honoured during the year	7,500
Cheques from debtors dishonoured	1,500
Bad debts written off	7,500
Sales return	6,000
B/R dishonoured	1,500
Provision for doubtful debts	750
Closing debtors	72,000



3. A fire occurred in the business premises of Mrs. Preethi on 10<sup>th</sup> October 2018. From the following figures ascertain the amount of fire claim to be lodged :

Stock on 1.1.2018 - ₹ 27,000

Purchases from 1.1.2018 to the date of fire - ₹ 1,47,000

Sales from 1.1.2018 to the date of fire - ₹ 1,50,000

Wages - ₹ 20,000

The rate of gross profit on cost is 25%

Stock salvaged was ₹ 18,000

4. Nirmala purchased a machine from Akila Machinery Ltd. on hire purchase system on 1.4.2015 payable ₹ 10,000 down and the balance as under :

₹ 13,000 at the end of the first year

₹ 12,000 at the end of the second year

₹ 11,000 at the end of the third year

Interest charged at 10% P.A. is included in these instalments.

Calculate the cash price of the machine.

5. State the differences between hire purchase system and instalment purchase system.

6. On 1<sup>st</sup> January 2018, Raju draw a 3 months bill on Veena for ₹ 10,000. The latter accepted the same on the due date, the bill was dishonoured. Nothing charges of ₹ 100 were paid.

Pass journal entries in the books of both the parties.

SECTION - B

Answer **any four** questions :

(4 × 1)

7. What is consignment? Distinguish between sale and consignment.





8. From the following particulars prepare total debtors account and total creditors account and find out total sale and total purchase :

	₹
Debtors as on 1 <sup>st</sup> Jan. 2017	5,000
Creditors as on 1 <sup>st</sup> Jan. 2017	4,000
Debtors as on 31 Dec. 2017	4,000
Creditors as on 31 <sup>st</sup> Dec. 2017	6,000
Bills payable issued during the year	8,000
Cash received from customers	3,000
Cash paid to suppliers	20,700
Cash returned to customers	270
Discount allowed to customers	150
Bad debts written off	1,200
Bills receivable endorsed to creditors	4,000
Bills receivable dishonoured by customers	1,000
Endorsed bills receivable dishonoured	500
Returns inwards	600
Return outwards	200
Cash sales	520
Cash purchases	5,600

109

**BCMCMC 156**

9. A fire occurred in the premises of Nandan Company Ltd. on 1.7.2018. From the following information, calculate the loss suffered by the company :

Stock on 1.1.2017	₹ 63,000
Purchases for the year ending 31.12.2017	6,50,000
Sales for the year ending 31.12.2017	5,00,000
Wages for the year ending 31.12.2017	1,00,000
Manufacturing expenses for the year ending 31.12.2017	20,000
Salary for the year ending 31.12.2017	50,000
Stock on 31.12.2017	4,84,000
Purchases from 1.1.2018 to date of fire	90,000
Sales from 1.1.2018 to date of fire	6,00,000
Stock salvaged	10,000

There was a practice in the firm to value stock at cost less 10%. But all of sudden, they changed this practice and valued stock on 31.12.2017 at cost plus 10%.

10. On 1.4.2015, Swasthik and Company purchased a motor car from Dhanalakshmi Ltd. on hire purchase system on the following terms :

1. Cash price of the motor car was ₹ 5,00,000 of which ₹ 2,00,000 to be paid on signing the agreement.
2. Balance to be paid in three equal annual instalments plus interest on the outstanding balance at 6%.
3. Swasthik and Co., charge depreciation at 20% per annum on original cost method.

Prepare

- (a) Motor car account
- (b) Dhanalakshmi limited account
- (c) Interest account and
- (d) Depreciation account in the books of Swasthik and Company.

10



11. On 1<sup>st</sup> Jan. 2017, Khan drew two bills on Farooq for 15,000. One for ₹ 10,000 payable 2 months after date and the other for ₹ 5,000 payable 3 months after date. Khan discounted the 1<sup>st</sup> bill at 6% per annum and endorsed the second bill in favour of Nazir. The 1<sup>st</sup> Bill was duly met on the maturity but the second bill was dishonoured and Nazir paid ₹ 100 on noting charges.

Pass journal entries in the books of Khan, Farooq and Nazir.

12. Ramya Ltd. sent 100 bicycles costing ₹ 2,500 each to Jayaraj Ltd. to be sold at the risk of the consignor. Jayaraj Ltd. was to get a commission at 6% on bicycles sold. Ramya Ltd. paid ₹ 6,000 towards freight and insurance. Jayaraj Ltd., took delivery of consignment by paying ₹ 2,000 for carriage and unloading and 4000 for salesman's salaries, godown rent etc., Jayaraj Ltd. sold 50 bicycles at ₹ 2,800 each for cash and 30 bicycles at ₹ 3,000 each on credit. Jayaraj Ltd. settled their account with Ramya Ltd. Prepare consignment account and Jayaraj Ltd. account in the books of Ramya Ltd.

SECTION - C

Answer **any two** questions :

(2 × 24 = 48)

13. Bhagya Furniture Mart of Mangalore consigned to Aparna Furniture Mart of Sullia, 100 chairs costing ₹ 250 each at a proforma invoice price which is 20% above cost. They paid ₹ 2,000 for packing and insurance.

Aparna Furniture Mart received the chairs and paid ₹ 1,000 for carriage. They sold 70 chairs at an average price of ₹ 500 per chairs and their selling expenses being ₹ 800. They remitted the balance by a bank draft after deducting their expenses and commission on sales which was fixed at

- (1) 10% on the invoice price and
- (2) 20% of the amount realized in excess of the invoice price.

Prepare in the books of Bhagya Furniture Mart, Mangalore

- (a) Consignment account
- (b) Aparna Furniture Mart account
- (c) Goods sent on consignment account

Also prepare in the books of Aparna Furniture Mart Sullia

- (d) Bhagya Furniture Mart account
- (e) Commission account.

111



14. On 1.1.2016, Mr. Bhaktha purchased a machine on hire purchase system from Vidyashree and Co. The cash price of the machine was ₹ 11,17,500 and the payment was agreed to be made as follows :

₹ 3,00,000 was to be paid on signing the agreement and the balance in three annual instalments of ₹3,00,000 each. Vidhyashree and Co. charged interest at 5% per annum on the unpaid cash price. Mr. Bhaktha decided to write off depreciation at 10% per annum on the diminishing balance method. Because of financial difficulties, Mr. Bhaktha having paid down payment and first instalment at the end of first year, could not pay the second instalment and Vidyashree and Company took possession of the machine. They sold it away for ₹ 7,00,000 after spending ₹ 50,000 on repairs of the machine. Both the parties close their books on 31<sup>st</sup> December every year. Prepare

In the books of Mr. Bhaktha

1. Machinery account
2. Vidhyashree & Co., A/c
3. Interest account
4. Depreciation account

In the books of Vidhyashree & Co.

5. Mr. Baktha's account
6. Repossessed machinery account.

15. From the following information relating to Mrs. Santhripathi who keeps her books on single entry system, prepare trading and profit and loss account for the year ending 31.3.2018 and a balance sheet as on that date.

Particulars	1.4.2017	31.3.2018
	Rs.	Rs.
Creditors	36,000	?
Furniture	16,000	16,000
Debtors	?	1,10,000
Stock	24,000	21,000
Cash	48,000	?

Additional information :

- a. Receipts from debtors ₹ 3,50,000
- b. Paid to creditors ₹ 1,80,000
- c. Total sales (including cash sales ₹ 76,000) ₹ 4,50,000

12



- d. Total purchases (including cash purchases ₹ 46,000) ₹ 2,40,000
- e. Sales returns ₹ 40,000
- f. Purchase returns ₹ 3,000
- g. Drawings ₹ 40,000
- h. Bad debts ₹ 2,000
- i. Discount allowed ₹ 6,000
- j. Discount received ₹ 5,000
- k. Rent ₹ 16,000
- l. Wages ₹ 6,000
- m. Trade expenses ₹ 4,000
- n. Salary ₹ 10,000
- o. Office expenses ₹ 6,000
- p. Outstanding salary ₹ 1,000
- q. Prepaid rent ₹ 1,600
- r. Depreciate furniture by 10%

16. On 1.4.2017 Raju accepted a three months bill drawn by his creditor Gopal for ₹ 10,000. On the same date, Gopal discounts the same at 5% per annum. Raju being unable to meet the bill at maturity, request Gopal to accept ₹ 4,000 in cash and to draw another bill for three months for the balance amount plus interest at 7% per annum. Gopal agrees. Before the second bill matures, Raju becomes insolvent and is unable to pay any amount what so ever. Show journal entries in the books of both the parties.

2P00146

Reg. No.

579MAN



BCMENL 153

**II Semester B.Com. Degree Examination, April/May 2019**

(Credit Based Semester Scheme)

(Common to all Batches)

**ENGLISH**

**General Proficiency and Communicative English**

Time : 3 Hours]

[Max. Marks : 80

SECTION - A

(PROSE & POETRY)

- I. Answer **any one** of the following in not more than two pages :  $(1 \times 10 = 10)$
1. What does Robert Lynd say about absent mindedness in his essay 'Forgetting'?
  2. How does Princess September realize the significance of freedom?
  3. What hints on public speaking does James Bryce provide in his essay?
- II. Answer **any two** of the following in not more than a page each :  $(2 \times 5 = 10)$
1. What does Robert Lynd say about the memories of poets and thinkers?
  2. Why, according to J.C. Hill are good manners very important?
  3. How does the story 'The Selfish Giant' present the idea that love and kindness could help anyone to achieve eternal peace?
  4. Why does James Bryce say, "It is better to be flippant than to be dull" in his essay, 'Some Hints on Public Speaking'?

14



III. Answer **any one** of the following in not more than two pages : (1 × 10 = 10)

1. How does Keats personify the autumn season in his poem 'Ode to Autumn'?
2. "The poem 'The Last of the Princes' captures the steady decline of the Mughal dynasty" – Explain.
3. How does the poem 'The Chimney Sweeper' portray the heartless repression and exploitation of children?

IV. Select **any two** of the following passages and answer the questions set them in one or two sentences each : (2 × 5 = 10)

1. The presence of a stiffened corse  
Is sad enough, but, to my mind  
The presence of a child that's blind,  
In a green garden, is far worse.

- (i) What does the expression 'stiffened corse' mean in the passage?
- (ii) What is the stiffened corse contrasted with in the passage? Explain.
- (iii) What does the 'green garden' symbolize?

2. Or on a half-reap'd furrow sound asleep,  
Drows'd with the fume of poppies, while thy hook  
Spares the next swath and all its twined flowers.

- (i) Whom does the pronoun 'thy' in the passage refer to?
- (ii) Who is found asleep on a half-reaped furrow? Why?
- (iii) What is the figure of speech used in the passage? Explain.

3. And by came an Angel who had a bright key,  
And he opened the coffins and set them all free;  
Then down a green plain, leaping, laughing they run,  
And wash in a river and shine in the Sun

- (i) Whom does the pronoun 'them' in the second line refer to?
- (ii) Who opened the coffins? What does it signify?
- (iii) What do they do when they are set free? What does it suggest?

15



4. Talents differ; all is well and wisely put

If I cannot carry forests on my back,

Neither can you crack a nut.

- (i) Who is the speaker of the above lines? (1)
- (ii) Whom does the speaker address in the passage? What does he intend to prove? (2)
- (iii) How does the speaker show that talents differ? (2)

V. Answer **any two** of the following in not more than a page each : (2 × 5 = 10)

1. How does W.H. Davies bring out the miserable condition of the blind child in his poem?
2. Why does Keats say that autumn is the season of mists and mellow fruitfulness?
3. What are the bitter-sweet memories that the last prince is left with?
4. What impact does the dream have on Tom in the poem 'The Chimney Sweeper'?

#### SECTION - B

#### (GRAMMAR)

VI. Do as directed :

1. In each of the following sentences a word is underlined. Choose the right synonym of the word underlined from the alternatives given below the sentence : (2 × 1 = 2)

(a) My grandfather is considered to be a venerable person

- (i) intelligent (ii) respectable (iii) likeable (iv) indecent

(b) The speaker explained in a lucid manner.

- (i) correct (ii) exact (iii) clear (iv) vague





2. Fill in the blanks in the following sentences using the appropriate antonyms of the words underlined : (2 × 1 = 2)

(a) My brother's calculations are always accurate but mine are \_\_\_\_\_.

(b) Virtue is often admired but \_\_\_\_\_ is condemned.

3. Fill in the blanks in the following sentences using the appropriate form of the words given in brackets : (2 × 1 = 2)

(a) This is a \_\_\_\_\_ spot (delight)

(b) It was an \_\_\_\_\_ decision. (impulse)

4. Fill in the blanks in the following sentences choosing the appropriate words from those given in brackets : (2 × 1 = 2)

(a) The bride was wearing a \_\_\_\_\_ and simple dress (plane/plain)

(b) \_\_\_\_\_ storm is common in the Northern part of India (Hail/Hale)

5. Write one-word substitutes for the following : (2 × 1 = 2)

(a) A stock of words used by or known to a particular person.

(b) Frozen vapour falling in pieces or pellets.

VII. 1. Do as directed : (6 × 1 = 6)

(a) Driven by hunger, he stole a piece of bread.

(Change this into a complex sentence)

(b) Pack your things and leave this place

(Change this into an interrogative sentence)

(c) Every student is present today

(Change this into a negative sentence without changing meaning)

17



(d) James is the most intelligent boy in the class.

(Change this into comparative degree)

(e) Farmers sow maize in the rainy season.

(Change this into passive voice)

(f) He asked her, "when do you intend to make the payment?"

(Change this into indirect speech)

2. Complete the following sentences using the correct question tags : (2)

(a) Let's go to the beach, \_\_\_\_\_?

(b) Sheela drove the car carefully, \_\_\_\_\_?

3. Fill in the blanks in the following sentences choosing the right linkers from the options given : (2)

(a) This is the rule, \_\_\_\_\_ there are many exceptions to it.

(i) for (ii) so (iii) but (iv) because

(b) Neither my mother \_\_\_\_\_ my father will be able to attend the party on Sunday.

(i) or (ii) but (iii) and (iv) nor

4. Write a paragraph of about ten sentences on **any one** of the following topics : (5)

(a) Gender equality

(b) Social media

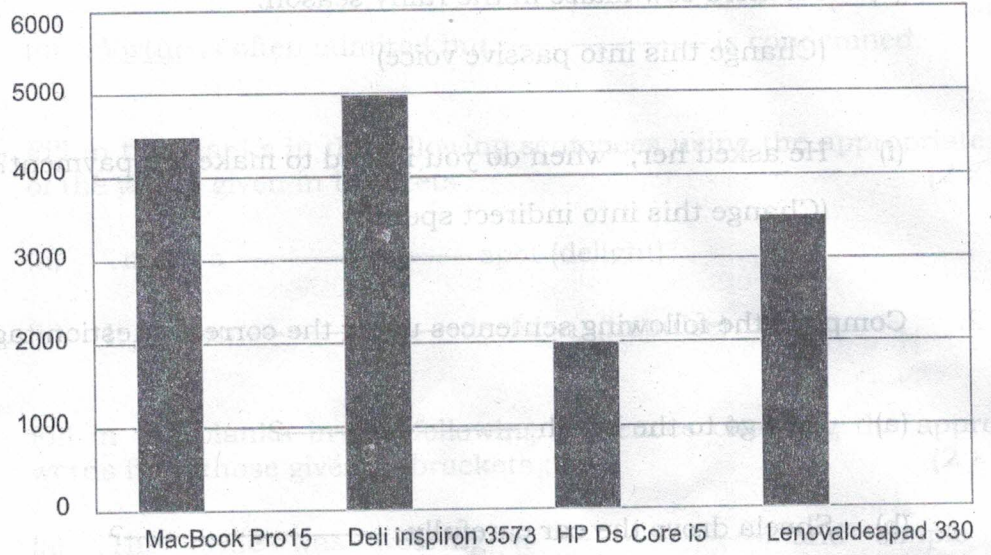
(c) The importance of cleanliness drive

128



5. Interpret the following Bar Chart in about ten sentences : (5)

The chart shows the number of laptop computers of different brands sold in Tokyo in a month.



Fill in the blanks in the following sentences choosing the right linker from the options given:

(a) This is the rule, but there are many exceptions to it.

(b) Neither my mother \_\_\_\_\_ my father will be able to attend the party on Sunday.

(c) \_\_\_\_\_ (i) or (ii) but (iii) and (iv) nor \_\_\_\_\_

Write a paragraph of about ten sentences on any one of the following topics:

(a) Gender equality

(b) Social media

(c) The importance of cleanliness drive

## II Semester B.Com. Degree Examination, April/May 2019

(Credit Based Semester Scheme)

(Common to all Batches)

### HINDI LANGUAGE


#### Group I – Paper II

Time : 3 Hours]

[Max. Marks : 80

I. एक शब्द या एक वाक्य में उत्तर लिखिए।

1. बच्चनजी की आत्मकथा कितने खंडों में उपलब्ध हैं?
2. मानव के कुकर्मों पर कौन हँसते हैं?
3. युवक की पहली पत्नी का नाम क्या था?
4. स्वामी विवेकानंदजी का विश्वास किस पर है?
5. रेशम कीट का आहार क्या है?



II. किन्हीं दो अवतरणों का संदर्भ सहित स्पष्टीकरण कीजिए।

(2 × 5 = 10)

1. मेरे भीतर किसी ने कहा कि इस पहिए से जो प्रेरणा तुम लेते रहे हो, उसके लिए तुम्हें सेंट केथरीन्स को धन्यवाद दिए बिना केंब्रिज से नहीं जाना चाहिए।
2. मैं तुम सबसे यही चाहता हूँ कि तुम आत्मप्रतिष्ठा, दलबन्दी और ईर्ष्या को सदा के लिए छोड़ दो।
3. ऐसे विद्वान को पाकर भारत गणित के क्षेत्र में गर्व कर सकता है।
4. मुझे अपने पास बुला लो, मैं तुम्हारे बिना नहीं रह सकता।

III. 'श्मशान' कहानी का सार लिखकर उसकी विशेषताओं पर प्रकाश डालिए।

(10)

अथवा

'बढ़ते शोर का गहराता संकट' निबंध का सार अपने शब्दों में लिखिए।



## II Semester B.Com. Degree Examination, April/May 2019

(Credit Based Semester Scheme)

(Common to all Batches)

### HINDI LANGUAGE


#### Group I – Paper II

Time : 3 Hours]

[Max. Marks : 80

I. एक शब्द या एक वाक्य में उत्तर लिखिए।

1. बच्चनजी की आत्मकथा कितने खंडों में उपलब्ध हैं?
2. मानव के कुकर्मों पर कौन हँसते हैं?
3. युवक की पहली पत्नी का नाम क्या था?
4. स्वामी विवेकानंदजी का विश्वास किस पर है?
5. रेशम कीट का आहार क्या है?



II. किन्हीं दो अवतरणों का संदर्भ सहित स्पष्टीकरण कीजिए।

(2 × 5 = 10)

1. मेरे भीतर किसी ने कहा कि इस पहिए से जो प्रेरणा तुम लेते रहे हो, उसके लिए तुम्हें सेंट केथरीन्स को धन्यवाद दिए बिना केंब्रिज से नहीं जाना चाहिए।
2. मैं तुम सबसे यही चाहता हूँ कि तुम आत्मप्रतिष्ठा, दलबन्दी और ईर्ष्या को सदा के लिए छोड़ दो।
3. ऐसे विद्वान को पाकर भारत गणित के क्षेत्र में गर्व कर सकता है।
4. मुझे अपने पास बुला लो, मैं तुम्हारे बिना नहीं रह सकता।

III. 'श्मशान' कहानी का सार लिखकर उसकी विशेषताओं पर प्रकाश डालिए।

(10)

अथवा

'बढ़ते शोर का गहराता संकट' निबंध का सार अपने शब्दों में लिखिए।



IV. किन्हीं दो पर टिप्पणी लिखिए।

(2 × 5 = 10)

1. सेंट केथरीन्स कालेज का चिह्न।
2. गंगा मैया के प्रदूषण के कारण।
3. मानव शरीर पर शोर के कुप्रभाव।
4. शमशान कहानी का युवक।

V. 'श्रीनिवास रामानुजन' जीवनी का सारांश लिखिए।

(10)

अथवा

'कीड़े का लार : कपड़े का तार' लेख का सार लिखिए।

VI. किन्हीं दो पर टिप्पणी लिखिए।

(2 × 5 = 10)

1. स्वामी विवेकानंदजी का युवाओं को संदेश
2. रामानुजन और गणित
3. चश्मे की मुख्य वस्तु
4. रेशम-कीट के प्रकार

VII. (अ) किन्हीं दो प्रश्नों के उत्तर लिखिए।

(2 × 4 = 8)

1. वाच्य की परिभाषा लिखकर उसके भेदों को उदाहरण सहित समझाइए।
2. काल किसे कहते हैं? उसके भेदों को सोदाहरण लिखिए।
3. समुच्चय बोधक अव्यय किसे कहते हैं? उसके कितने भेद हैं? सोदाहरण समझाइए।

(आ) वाक्य शुद्ध कीजिए।

(4 × 1 = 4)

1. गर्मी का मारे बुरा हाल है।
2. भोजन की बाद विश्राम करना चाहिए।
3. वह रोती रोती सो गई।
4. राधा अच्छी गाती है।



(इ) निम्नलिखित प्रशासनिक शब्दावलियों का हिन्दी रूप लिखिए।

(4 × 1 = 4)

1. Delay is regretted.
2. Service rules
3. Stay order
4. Old age pension

(ई) पद परिचय दीजिए।

(4)

हम मद्रास जाते हैं।

(उ) हिन्दी में अनुवाद कीजिए।

(5)

Elephants are found in India and Africa. The African elephant differ from the Indian. The African elephant is larger with longer tusks and bigger ears. In both countries they live in herds in the jungles. They keep away from men.

ಆನೆಗಳು ಭಾರತ ಮತ್ತು ಆಫ್ರಿಕಾದಲ್ಲಿ ಕಂಡು ಬರುತ್ತವೆ. ಆಫ್ರಿಕದ ಆನೆಯು ಭಾರತದ ಆನೆಗಿಂತ ಭಿನ್ನವಾಗಿರುತ್ತದೆ. ಆಫ್ರಿಕದ ಆನೆಗಳು ಬೃಹದಾಕಾರವಾಗಿದ್ದು, ಅವುಗಳ ದಂತಗಳು ಉದ್ದವಾಗಿ ಇರುತ್ತವೆ ಮತ್ತು ಕಿವಿಗಳು ವಿಶಾಲವಾಗಿರುತ್ತವೆ. ಎರಡೂ ದೇಶಗಳಲ್ಲಿ ಅವು ಕಾಡಿನಲ್ಲಿ ಗುಂಪುಗಳಲ್ಲಿ ಜೀವಿಸುತ್ತವೆ. ಅವು ಮನುಷ್ಯರಿಂದ ದೂರವಿರುತ್ತವೆ.



## II Semester B.Com. Degree Examination, April/May 2019

(Credit Based Semester Scheme)

(Common to all Batches)

### COMMERCE

#### Business Statistics and Mathematics

Time : 3 Hours]

[Max. Marks : 80]

- Instructions :**
- 1) Non programmable calculator may be used.
  - 2) Logarithm tables will be provided on request.
  - 3) Provide working notes wherever necessary.

#### SECTION - A

Answer **any four** of the following :

(4 × 4 = 16)

1. State the properties of regression coefficients.
2. What is Beta of Investment? Give the interpretation of the value of Beta.
3. Briefly explain the components of Time Series.
4. The cash price of the article sold is Rs. 18,000. The trade discount and cash discounts are 20% and 10% respectively. Find the marked price of the article.
5. A person has R.D. a/c with a bank for 5 years. At 4.5% simple interest per annum, what will be the amount at the end of fifth year?
6. If the simple interest on a sum of money for 2 years at 6% per annum is Rs. 600, what is the compound interest on the same sum at the same rate of interest for the same period?



Answer **any four** of the following :

7. From the following data calculate Karl Pearson's correlation coefficient :

Price (Rs.)	38	66	61	92	81	70	30	96	38	78
Supply (Rs.)	45	64	59	85	73	65	43	90	50	86

8. Calculate Spearman's Rank correlation for the following data :

Marks in Statistics :	45	95	72	36	38	45	20	60	36	90
Marks in Accountancy :	35	90	85	35	15	40	30	45	35	80

9. You are given the following information about the expenditure on advertisement and sales (rupees in lakhs) :

	Advertisement Expenditure	Sales
Mean	20	120
S.D.	5	2

Coefficient of correlation = 0.8

- (a) Obtain two regression equations.  
 (b) Find the likely sales when expenditure on advertisement is Rs. 30 lakhs.
10. At certain rate of interest compounded quarterly a sum doubles in 3 years.

Find

- (a) The nominal rate of interest  
 (b) Effective rate of interest.

11. The following are the two regression equations. Find the correlation coefficient between  $x$  and  $y$  and their means :

$$x + 2y - 5 = 10$$

$$2x + 3y - 8 = 10$$

24

12. Find the equated due date for the following bills :

- (a) Rs. 5,000 drawn on March 20 for 4 months
- (b) Rs. 8,000 drawn on April 15 for 3 months
- (c) Rs. 10,000 drawn on May 12, for 5 months
- (d) Rs. 6,000 drawn on June 6, for 2 months.

SECTION - C

Answer **any two** of the following : (2 × 16 = 32)

13. Compute the coefficient of correlation between dividends and prices of securities as given below :

Security price (Rs.)	Annual dividend (Rs.)				
	0-5	5-10	10-15	15-20	20-25
50-100	5	6	-	-	-
100-150	-	5	8	1	-
150-200	-	-	4	3	3
200-250	-	-	-	6	3
250-300	-	-	-	4	2

14. The following data relates to monthly income and expenditure on food of 10 families (Rs. in thousands) :

Income (Rs.) :	32	35	40	42	45	57	43	30	34	42
Expenditure : (Rs.)	20	22	25	27	30	34	25	20	21	26

- (a) Find two regression equations
- (b) Find the most likely expenditure when income is Rs. 50,000
- (c) Find the correlation coefficient using regression coefficients.



15. The following are the annual profit in a certain business. Fit a straight line trend for the following data :

Year :	2011	2012	2013	2014	2015	2016	2017
Profit (Rs. '000)	60	72	75	78	83	88	95

Also

- (a) find the trend values by the method of least squares
  - (b) make an estimate of the profit for the year 2019.
16. A bill was drawn on April 15, 2018 for a period of 4 months. It was accepted on May 18 and discounted on June 6, 2018 at 8% p.a. If the depositor received Rs. 24,600, calculate face value, true discount, Banker's gain and present value of the bill.

Security price (Rs.)	0-5	5-10	10-15	15-20	20-25
	50-100	100-150	150-200	200-250	250-300

14. The following data refers to monthly income and expenditure on food of 10 families (Rs. in thousands):

Income (Rs.)	32	35	40	42	45	48	30	34	42
Expenditure (Rs.)	20	22	25	27	30	34	25	20	28

- (a) Find two regression equations.
- (b) Find the most likely expenditure when income is Rs. 50,000.
- (c) Find the correlation coefficient using regression coefficients.

Reg. No.

--	--	--	--	--	--	--	--	--	--

BCMKAL 154

**II Semester B.Com. Degree Examination, April/May 2019**

(Credit Based Semester Scheme)

(2017-18 Batch onwards)

**KANNADA**

**ಕನ್ನಡ ಭಾಷಾ ಪತ್ರಿಕೆ - II**

Time : 3 Hours]

Max. Marks : 80

(3 × 8 = 24)

I. ಈ ಕೆಳಗಿನ ಪ್ರಶ್ನೆಗಳಿಗೆ ವಿವರಣಾತ್ಮಕವಾಗಿ ಉತ್ತರಿಸಿ :

1. ನಿನ್ನಾಸೆ ನನ್ನ ಬಿಡದಲ್ಲ ಎಂಬ ಹಾಡಿನಲ್ಲಿ ತಾಯಿ ಹಾಗೂ ತವರಿನ ಬಗೆಗೆ ಇರುವ ಮಮತೆ ಹೇಗೆ ಅನಾವರಣಗೊಂಡಿದೆ? ವಿವರಿಸಿರಿ.

ಅಥವಾ

ತಿರು ನೀಲಕಂಠರ ಗುಪ್ತವ್ರತವನ್ನು ಶಿವನು ಬಹಿರಂಗಪಡಿಸಿದ ಬಗೆ ಹೇಗೆ? ವಿವರಿಸಿರಿ.

2. ಗೌಡರ ಗಡಿಯಾರ ಕಡಿಯಲು ಜೋಗಿಯು ನಿರ್ಧರಿಸಲು ಕಾರಣವೇನು? ಪರಿಣಾಮವೇನಾಯಿತು?

ಅಥವಾ

ಪಂಡಿತ ರಮಾಬಾಯಿ ಬದುಕಿನ ಸಂಕಷ್ಟಗಳನ್ನು ಎದುರಿಸಿ ನಿಂತ ಪರಿ ಹೇಗೆ? ವಿವರಿಸಿರಿ.

3. ರಾಜಕೀಯ ಸಂಘರ್ಷದಲ್ಲಿ ಅಮಾಯಕರು ಬಲಿಯಾಗುವ ಬಗೆಯನ್ನು ಕೊಳ್ಳಿ ನಾಟಕದಲ್ಲಿ ಹೇಗೆ ಚಿತ್ರಿಸಲಾಗಿದೆ? ವಿವರಿಸಿರಿ.

ಅಥವಾ

ಉಜ್ಜಿ ಯಾರು? ಅವಳು ಯಾವ ಕಾರಣಕ್ಕಾಗಿ ದ್ರೌಪದಿಯಲ್ಲಿಗೆ ಬಂದಳು? ವಿವರಿಸಿರಿ.

II. ಈ ಕೆಳಗಿನ ಪ್ರಶ್ನೆಗಳಿಗೆ ಉತ್ತರಿಸಿ :

(3 × 5 = 15)

1. ಮಾಗಡಿ ಕೆಂಪೇಗೌಡನ ಸೊಸೆ ಬಲಿಯಾದ ಪ್ರಸಂಗವೇನು?

ಅಥವಾ

'ದಯೆಯೇ ಧರ್ಮದ ಕಣ್ಣು' ಕಥನ ಗೀತೆಯ ಆಶಯವೇನು?

27



2. ಮೂಗಿನ ಪ್ರಾಮುಖ್ಯತೆಯನ್ನು ಪ್ರಬಂಧಕಾರರು ಗುರುತಿಸಿದ ಬಗೆ ಹೇಗೆ?

ಅಥವಾ

ಪ್ರತ್ಯಕ್ಷ ತೆರಿಗೆ ಮತ್ತು ಪರೋಕ್ಷ ತೆರಿಗೆ ಕುರಿತು ಬರೆಯಿರಿ.

3. ಉಜ್ಜಿ ಪಾತ್ರದ ಪರಿಚಯ ಮಾಡಿ ಕೊಡಿ.

ಅಥವಾ

ಕೊಳ್ಳಿ ನಾಟಕದ ಕತೆಯಲ್ಲಿ ಮಾಡಿಕೊಂಡ ಮಾರ್ಪಾಡುಗಳು ಯಾವುವು?

III. ಈ ಕೆಳಗಿನ ಒಂದು ಪದ್ಯದ ಹಿನ್ನೆಲೆಯೊಂದಿಗೆ ಅರ್ಥ ಸ್ವಾರಸ್ಯ ಬರೆಯಿರಿ :

(1 × 5 = 5)

1. ಈ.....

ಕಾಲಕ್ಕೆ ಮರಳಿ ದಿಕ್ಕಿಡುತ್ತಿದ್ದಾಳೆ ಹಿಮ್ಮೆಟ್ಟಿ  
ಮನೆಯೊಳಗೆ ಕೂರುವಂತಿಲ್ಲ

ಹೊರ ಬರುವಂತಿಲ್ಲ

ಯೋಚಿಸಿ ಹಣ್ಣಾಗಿ 'ರಕ್ಷೆ'ಗಾಗಿ ವೃಥಾ ಆಲಾಪ

ಹಾಡಿ ದಣಿದಿದ್ದಾಳೆ.

2. ಧರೆಯ ನಿಕ್ಷೇಪವನು ಕದ್ದಲ್ಲಿಗೋಡಿದರೂ

ಧರೆಯದಲ್ಲಲ್ಲಿ ಕಳ್ಳನ ಕಾಡುವಂತೆ

ಗುರುಸಿದ್ಧ ಎನ್ನ ಮನವಾದ ವಿಷಯಗಳೊಳ

ಗೆರಗಲಲ್ಲೆಲ್ಲ ನೀಂ ಕಾಣಿಸದೆ ಬಿಡಿಸೆ

IV. ಈ ಕೆಳಗಿನವುಗಳಲ್ಲಿ ಎರಡನ್ನು ಕುರಿತು ಸಂದರ್ಭ ಸಹಿತ ವಿವರಿಸಿರಿ :

(2 × 4 = 8)

1. ಪಿಡಿವನೆನೆ ಮೊದಲೆ ಮುಮ್ಮೂರ ಹಾರುತಿಹುದು.

2. ಕೆಡದಂತೆ ಬಯ್ಯಿಟ್ಟು ಕುಡುವುದೀ ಪಾತ್ರೆಯಂ.

3. ಮಾತೆ ನಿನ್ನಾ ಕಾಪರ್ಕೇ (ಮಾತೆ ನಿನ್ನಾ ರಕ್ಷೆಗೆ)

4. ಚಂದಾದ ರಂಗೋಲಿ ಬಿಡಿಸಿದವಳು

2.8



V. (ಅ) ಈ ಕೆಳಗಿನವುಗಳಲ್ಲಿ ಎರಡನ್ನು ಕುರಿತು ಟಿಪ್ಪಣಿ ಬರೆಯಿರಿ :

(2 × 4 = 8)

1. ರಮಾಬಾಯಿ
2. ಬಿ.ಜಿ.ಎಲ್. ಸ್ವಾಮಿ
3. ಜಿ.ಎಸ್.ಟಿ. ಮಂಡಳಿ
4. ಬಿದಿರಿನ ಹೂ-ಕ್ಷಾಮ

(ಆ) ಕೆಳಗಿನವುಗಳಲ್ಲಿ ಎರಡನ್ನು ಕುರಿತು ಟಿಪ್ಪಣಿ ಬರೆಯಿರಿ :

(2 × 4 = 8)

1. ಭೀಮ
2. ಪ್ರಾತಿಕಾಮಿಕ
3. ವೈಶಂಪಾಯನ ಸರೋವರ
4. ಡಾ. ಜಿ.ಎಸ್. ಭಟ್ಟ

VI. ಕೆಳಗಿನ ಪ್ರಶ್ನೆಗಳಿಗೆ ಒಂದು ವಾಕ್ಯದಲ್ಲಿ ಉತ್ತರಿಸಿರಿ :

(12 × 1 = 12)

1. ಕೆಂಪೇಗೌಡನಿಗೆ ಹತ್ತು ಊರುಗಳನ್ನು ಬಳುವಳಿಯಾಗಿ ಕೊಟ್ಟವರು ಯಾರು?
2. 'ತಿರುನೀಲಕಂಠದೇವರ ರಗಳೆ'ಯನ್ನು ಬರೆದವರು ಯಾರು?
3. ಕಾಸಾರ ಎಂದರೇನು?
4. ಮನಸ್ಸನ್ನು ಯಾವುದಕ್ಕೆ ಹೋಲಿಸಲಾಗಿದೆ?
5. 'ಮೂಗು' ಲಲಿತ ಪ್ರಬಂಧವನ್ನು ಯಾವ ಕೃತಿಯಿಂದ ಆರಿಸಲಾಗಿದೆ?
6. ಬಿ.ಜಿ.ಎಲ್. ಸ್ವಾಮಿಯವರ ಅಭಿನಂದನಾ ಗ್ರಂಥ ಯಾವುದು?
7. ಹೂಡುವಳಿ ತೆರಿಗೆ ಎಂದರೇನು?
8. ಡೀ.ಕೆ. ಎಂದರೇನು?
9. ಮಹಾಭಾರತ ಯುದ್ಧ ನಡೆದ ಸ್ಥಳ ಯಾವುದು?
10. ಪಟ್ಟ ಬಂಧೋತ್ಸವದ ಮೆರವಣಿಗೆ ಯಾವ ಸ್ಥಳದಿಂದ ಹೊರಡಬೇಕೆಂದು ನಿಗದಿಯಾಗಿತ್ತು?
11. ಅರಗಿನ ಮನೆಯಲ್ಲಿ ಬೆಂದು ಹೋದವರು ಯಾರು?
12. ದ್ರೌಪದಿಯ ವಾಸಕ್ಕೆ ಯಾರ ಮನೆಯನ್ನು ಕೊಡಲಾಯಿತು?

Reg. No.

--	--	--	--	--	--	--	--	--	--



BCMKAL 153

**II Semester B.Com. Degree Examination, April/May 2019**


*(Credit Based Semester Scheme)*

*(2016-17 and earlier batches)*

**KANNADA**

**Kannada Bhasha Patrike – II**

Time : 3 Hours]



ಭಾಗ - 1

(ಕಾವ್ಯ)

I. (ಅ) ಒಂದು ಪ್ರಶ್ನೆಗೆ ವಿವರಣಾತ್ಮಕವಾಗಿ ಉತ್ತರಿಸಿರಿ :

(1 × 8 = 8)

1. ಮಹಾಶ್ವೇತೆ ಮತ್ತು ಪುಂಡರೀಕರ ಭೇಟಿಯ ಸ್ವಾರಸ್ಯವನ್ನು ಕಾವ್ಯದ ಹಿನ್ನೆಲೆಯಲ್ಲಿ ವಿವರಿಸಿರಿ.
2. ಚೆನ್ನಯ್ಯನ ಭಕ್ತಿಯ ಹಿರಿಮೆಯನ್ನು ಹರಿಹರ ಕವಿ ಕಾವ್ಯದಲ್ಲಿ ಹೇಗೆ ಚಿತ್ರಿಸಿದ್ದಾರೆ? ವಿವರಿಸಿರಿ.

(ಆ) ಒಂದು ಪ್ರಶ್ನೆಗೆ ಸಂಕ್ಷಿಪ್ತವಾಗಿ ಉತ್ತರಿಸಿರಿ :

(1 × 5 = 5)

1. ಕಾಡು ಮತ್ತು ನಾಡುಗಳ ಪ್ರಭಾವಕ್ಕೆ ಮನುಷ್ಯ ಒಳಗಾದ ಬಗೆ 'ನಿರ್ಗಮನ' ಕವಿತೆಯಲ್ಲಿ ಹೇಗೆ ಮೂಡಿ ಬಂದಿದೆ? ವಿವರಿಸಿರಿ.
2. ಗಿಳಿಯು ಪಂಜರದೊಳಿಲ್ಲ ಕೀರ್ತನೆಯ ಆಶಯವನ್ನು ಚರ್ಚಿಸಿರಿ.

(ಇ) ಎರಡರ ಬಗ್ಗೆ ಟಿಪ್ಪಣಿ ಬರೆಯಿರಿ :

(2 × 3 = 6)

1. ಪುರಂದರದಾಸ
2. ಹಂಸಲೇಖ
3. ಎಚ್.ಎಸ್. ವೆಂಕಟೇಶ ಮೂರ್ತಿ



II. (ಅ) ಒಂದು ಪದ್ಯದ ಸಂದರ್ಭ ಸೂಚಿಸಿ, ಭಾವವನ್ನು ವಿವರಿಸಿರಿ :

(1 × 5 = 5)

1. ನಿಯತೇಂದ್ರಿಯನೊಳ್ ತೇಜೋ  
ಮಯನೊಳ್ ರೂಪೈಕ ಪಕ್ಷಪಾತದ ನೆಲೆ ನೀ  
ತಿಯನುಲೆದಂ ಮುನಿಪನೊಳ್ ನಿ  
ಭಯನಂಗಜನೆನ್ನನಿಂತಿರಲ್ ಸೋಲಿಕುಮೆ
2. ಹೊಲಬನಲೆಯದ ಗುರುವು ತಿಳಿಯಲೆಯದ ಶಿಷ್ಯ  
ನೆಲೆಯನಾರಯ್ಯದುಪದೇಶ ವಂಧಕನು  
ಕಳನ ಹೊಕ್ಕಂತೆ ಸರ್ವಜ್ಞ.

(ಆ) ಎರಡು ಸಾಲುಗಳ ಸಂದರ್ಭ ಸೂಚಿಸಿ ಸ್ವಾರಸ್ಯ ಬರೆಯಿರಿ :

(2 × 3 = 6)

1. ಮೈಯನೆ ಹಿಂಡಿನೊಂದರು ಕಬ್ಬು ಸಿಹಿಯ ಕೊಡುವುದು
2. ಬಾಳೆಗೆ ಮುಳ್ಳುಂಟೆ ಬದನಿಗೆ ಚಪ್ಪರುಂಟೆ
3. ಮೇದಿನಿಗೆ ಬೀದಿಗಟುವಾದುದೆನ್ನಯ ಭಕ್ತಿ

III. ಕೆಳಗಿನ ಪ್ರಶ್ನೆಗಳಿಗೆ ಒಂದೊಂದು ವಾಕ್ಯದಲ್ಲಿ ಉತ್ತರಿಸಿರಿ :

(5 × 1 = 5)

1. ರಗಳೆ ಕಾವ್ಯ ಪ್ರಕಾರವನ್ನು ಜೀವಂತಗೊಳಿಸಿದ ಕವಿ ಯಾರು?
2. 'ಕರ್ನಾಟಕ ಕಾದಂಬರಿ' ಕಾವ್ಯವನ್ನು ಬರೆದ ಕವಿಯ ಹೆಸರೇನು?
3. ಪುರಂದರದಾಸರ ಪೂರ್ವಾಶ್ರಮದ ಹೆಸರೇನು?
4. ಕನ್ನಡ ಚಲನಚಿತ್ರ ರಂಗದ ಭೀಷ್ಮ ಎಂದು ಯಾರನ್ನು ಕರೆಯಲಾಗಿದೆ?
5. 'ಈ ಭೂಮಿ ಬಣ್ಣದ ಬುಗುರಿ' ಇದು ಯಾವ ಚಲನಚಿತ್ರದ ಗೀತೆ?

ಭಾಗ - 2

(ಗದ್ಯ)

IV. (ಅ) ಒಂದು ಪ್ರಶ್ನೆಗೆ ವಿವರಣಾತ್ಮಕವಾಗಿ ಉತ್ತರಿಸಿರಿ :

(1 × 8 = 8)

1. ಮಹಿಳೆಯ ಸ್ಥಿತಿಗತಿ ಕುರಿತು ಡಾ. ಎನ್. ಗಾಯತ್ರಿಯವರು ವ್ಯಕ್ತಪಡಿಸಿದ ವಿಚಾರಗಳನ್ನು ವಿವರಿಸಿರಿ.
2. ಸುದೀಪದತ್ತಾರ ಬದುಕಿನ ಯಶಸ್ಸಿನ ಹಿಂದಿರುವ ಶ್ರಮದ ವಿಚಾರಗಳನ್ನು ವಿವರಿಸಿರಿ.

(ಆ) ಒಂದು ಪ್ರಶ್ನೆಗೆ ಪ್ರಬಂಧದ ಹಿನ್ನೆಲೆಯಲ್ಲಿ ವಿವರಿಸಿರಿ :

(1 × 8 = 8)

1. ಯುವ ಜನಾಂಗಕ್ಕೆ ಅಗತ್ಯವಿರುವ 'ದರ್ಶನದ' ಬಗ್ಗೆ ಕುವೆಂಪುರವರ ವಿಚಾರಧಾರೆಗಳನ್ನು ಚರ್ಚಿಸಿರಿ.
2. ರಸಿಕತೆಯ ಕುರಿತು ಚೆನ್ನವೀರ ಕಣವಿಯವರ ವಿಚಾರಗಳನ್ನು ಲೇಖನದ ಹಿನ್ನೆಲೆಯಲ್ಲಿ ವಿವರಿಸಿರಿ.





V. ಒಂದು ಪ್ರಶ್ನೆಗೆ ವಿಶ್ಲೇಷಣಾತ್ಮಕವಾಗಿ ಉತ್ತರಿಸಿರಿ : (1 × 5 = 5)

1. ಅಕ್ಷರ ಸಂತ ಹಾಜಬ್ಬ ಪರಿಶ್ರಮದ ಬದುಕಿನ ಮೂಲಕ ಸಾಧಿಸಿದ ಶೈಕ್ಷಣಿಕ ಅಭ್ಯುದಯವನ್ನು ವಿವರಿಸಿರಿ.
2. ಮತಭ್ರಾಂತಿಯೂ ಮೌಢ್ಯವೂ ವೈಜ್ಞಾನಿಕ ಪ್ರಗತಿಗೆ ಹೇಗೆ ಕಂಟಕಗಳಾದವು ಎನ್ನುವುದನ್ನು ಕುವೆಂಪುರವರ ಅಭಿಪ್ರಾಯದೊಂದಿಗೆ ವಿವರಿಸಿರಿ.

VI. ಒಂದು ವಾಕ್ಯದಲ್ಲಿ ಉತ್ತರಿಸಿರಿ : (4 × 1 = 4)

1. ಪರ್ಜನ್ಯಜವ ಎಂದರೇನು?
2. ಮಣ್ಣಿನ ಮೆರವಣಿಗೆ ಇದು ಯಾರ ಕವನ ಸಂಕಲನ?
3. ಕನ್ನಡಕ್ಕೆ ಮೊದಲ ಜ್ಞಾನಪೀಠ ಪ್ರಶಸ್ತಿ ತಂದುಕೊಟ್ಟ ಕೃತಿ ಯಾವುದು?
4. ಹಾಜಬ್ಬರ ಜನ್ಮಸ್ಥಳ ಯಾವುದು?

ಭಾಗ - 3

(ನಾಟಕ)

VII. (ಅ) ಒಂದು ಪ್ರಶ್ನೆಗೆ ವಿವರಣಾತ್ಮಕವಾಗಿ ಉತ್ತರಿಸಿರಿ : (1 × 8 = 8)

1. ನಾಟಕದಲ್ಲಿ ಉತ್ಪನ್ನ ಸಿದ್ಧತೆ ಗೋಚರ ಮತ್ತು ಅಗೋಚರರ ಮೂಲಕ ಹೇಗೆ ಅನಾವರಣಗೊಂಡಿದೆ? ವಿವರಿಸಿರಿ.
2. ನೀಲಾಂಜನೆ ನೃತ್ಯದ ಸನ್ನಿವೇಶ ಮತ್ತು ಅದರ ಪರಿಣಾಮಗಳನ್ನು ವಿವರಿಸಿರಿ.

(ಆ) ಒಂದು ಪ್ರಶ್ನೆಗೆ ಸಂಕ್ಷಿಪ್ತವಾಗಿ ಉತ್ತರಿಸಿರಿ : (1 × 6 = 6)

1. ಭರತ ಮತ್ತು ಬಾಹುಬಲಿಯ ನಡುವೆ ನಡೆದ ಯುದ್ಧದ ಸಂದರ್ಭದ ಸಂಭಾಷಣೆಯನ್ನು ಚರ್ಚಿಸಿರಿ.
2. ದೇವದತ್ತನ ಏಕಮುಖ ಪ್ರಣಯ ಪ್ರಸಂಗದ ಸ್ವಾರಸ್ಯವನ್ನು ವಿವರಿಸಿರಿ.

VIII. ಎರಡು ಸಾಲುಗಳಿಗೆ ಸಂದರ್ಭ ಸೂಚಿಸಿ ಸ್ವಾರಸ್ಯ ಬರೆಯಿರಿ : (2 × 2 = 4)

1. ವೇಷಕ್ಕೆ ತಕ್ಕ ಭಾಷೆ, ಕಾಲಕ್ಕೆ ತಕ್ಕ ಪ್ರತಿಕ್ರಿಯೆ ಇವೆರಡೂ ರಂಗಭೂಮಿಯ ಧೈಯವಾಕ್ಯಗಳು.
2. ಚಿಕ್ಕ ಪ್ರಾಯದವರನ್ನು ಜಯಲಕ್ಷ್ಮೀ ಒಲಿಯುತ್ತಾಳೆ.
3. ಹುಟ್ಟುತ್ತ ಅಣ್ಣ ತಮ್ಮಂದಿರು ಬೆಳೆಯುತ್ತಾ ದಾಯಾದಿಗಳು ಅನಿಸಿಕೊಳ್ಳಬೇಡಿ.

IX. ಒಂದು ವಾಕ್ಯದಲ್ಲಿ ಉತ್ತರಿಸಿರಿ : (2 × 1 = 2)

1. ಪೌದನಪುರವನ್ನು ಆಳುತ್ತಿದ್ದ ದೊರೆ ಯಾರು?
2. ಬಿ. ಸಿದ್ದಲಿಂಗಯ್ಯ ಕಂಬಾಳು ಇವರ ಕಾವ್ಯ ನಾಮ ಯಾವುದು?

Reg. No.

--	--	--	--	--	--	--	--	--	--	--

BCMCMC 157

**II Semester B.Com. Degree Examination, April/May 2019**

*(Credit Based Semester Scheme)*

*(2014-15 Batches onwards)*

*(Common to all Batches)*

**Modern Banking**

Time : 3 Hours]


[Max. Marks : 120

SECTION - A/ವಿಭಾಗ - ಎ

Answer **any four** questions :

ಯಾವುದಾದರೂ ನಾಲ್ಕು ಪ್ರಶ್ನೆಗಳಿಗೆ ಉತ್ತರಿಸಿ :

1. Mention the functions of EXIM-Bank.  
ಎಕ್ಸಿಮ್ ಬ್ಯಾಂಕ್‌ನ ಕಾರ್ಯಗಳನ್ನು ನಮೂದಿಸಿರಿ.
2. What is "Self Help Group (SHG)"? State its features.  
ಸ್ವ-ಸಹಾಯ ಗುಂಪು ಎಂದರೇನು? ಸ್ವ-ಸಹಾಯ ಗುಂಪುಗಳ ಲಕ್ಷಣಗಳನ್ನು ತಿಳಿಸಿರಿ.
3. Write a note on NEFT and RTGS.  
ನೆಫ್ಟ್ ಮತ್ತು ಆರ್.ಟಿ.ಜಿ.ಎಸ್. ಬಗ್ಗೆ ಟಿಪ್ಪಣಿ ಬರೆಯಿರಿ.
4. Explain the features of debit cards and credit cards.  
ಡೆಬಿಟ್ ಕಾರ್ಡ್ ಮತ್ತು ಕ್ರೆಡಿಟ್ ಕಾರ್ಡ್‌ಗಳ ಲಕ್ಷಣಗಳನ್ನು ವಿವರಿಸಿರಿ.
5. Write a note on 'Bharathiya Mahila Bank'.  
ಭಾರತೀಯ ಮಹಿಳಾ ಬ್ಯಾಂಕ್‌ನ ಬಗ್ಗೆ ಟಿಪ್ಪಣಿ ಬರೆಯಿರಿ.
6. What is "Electronic Banking"? Explain.  
"ವಿದ್ಯುನ್ಮಾನ ಬ್ಯಾಂಕಿಂಗ್" ಎಂದರೇನು? ವಿವರಿಸಿರಿ.





## SECTION - B/ವಿಭಾಗ - ಬಿ

Answer **any four** questions :

(4 × 12 = 48)

ಯಾವುದಾದರೂ ನಾಲ್ಕು ಪ್ರಶ್ನೆಗಳಿಗೆ ಉತ್ತರಿಸಿ :

7. Explain the functions of RBI as banker's bank and banker to the Government.  
ಬ್ಯಾಂಕರ್‌ಗಳ ಬ್ಯಾಂಕಾಗಿ ಮತ್ತು ಸರ್ಕಾರದ ಬ್ಯಾಂಕಾಗಿ ಭಾರತೀಯ ರಿಸರ್ವ್ ಬ್ಯಾಂಕಿನ ಕಾರ್ಯಗಳನ್ನು ವಿವರಿಸಿರಿ.
8. Explain the general utility services of the commercial banks.  
ವಾಣಿಜ್ಯ ಬ್ಯಾಂಕುಗಳ ಸಾಮಾನ್ಯ ಉಪಯೋಗ ಸೇವೆಗಳನ್ನು ವಿವರಿಸಿರಿ.
9. What is endorsement? Explain the types of endorsement.  
ಹಿಂಬರಹ ಎಂದರೇನು? ಹಿಂಬರಹದ ವಿವಿಧ ರೀತಿಗಳನ್ನು ವಿವರಿಸಿರಿ.
10. Define a cheque and explain its essential features.  
ಚೆಕ್‌ನ್ನು ವ್ಯಾಖ್ಯಾನಿಸಿ ಮತ್ತು ಒಂದು ಚೆಕ್‌ನ ಅವಶ್ಯಕ ಲಕ್ಷಣಗಳನ್ನು ವಿವರಿಸಿರಿ.
11. Who is a paying banker? What are the precautions to be taken by him while honouring his customer's chdques?  
ಪಾವತಿ ಬ್ಯಾಂಕರ್ ಎಂದರೆ ಯಾರು? ತನ್ನ ಗ್ರಾಹಕರ ಚೆಕ್‌ಗಳನ್ನು ಪಾವತಿಸುವಾಗ ಆತ ಅನುಸರಿಸಬೇಕಾದ ಮುಂಜಾಗ್ರತಾ ಕ್ರಮಗಳು ಯಾವುವು?
12. Explain briefly the changing role of commercial banks in India.  
ಭಾರತದಲ್ಲಿ ಬದಲಾಗುತ್ತಿರುವ ಸನ್ನಿವೇಶದಲ್ಲಿ ವಾಣಿಜ್ಯ ಬ್ಯಾಂಕುಗಳ ಪಾತ್ರವನ್ನು ವಿವರಿಸಿರಿ.

## SECTION - C/ವಿಭಾಗ - ಸಿ

Answer **any two** questions :

(2 × 24 = 48)

ಯಾವುದಾದರೂ ಎರಡು ಪ್ರಶ್ನೆಗಳಿಗೆ ಉತ್ತರಿಸಿ :

13. Briefly explain the different methods of credit control by RBI.  
ಭಾರತೀಯ ರಿಸರ್ವ್ ಬ್ಯಾಂಕಿನ ವಿವಿಧ ಪತ್ತಿನ ನಿಯಂತ್ರಣ ವಿಧಾನಗಳನ್ನು ಸಂಕ್ಷಿಪ್ತವಾಗಿ ವಿವರಿಸಿರಿ.
14. Explain in detail the functions of (a) NABARD and (b) Land Development Banks.  
(a) ನಬಾರ್ಡ್ (b) ಭೂ ಅಭಿವೃದ್ಧಿ ಬ್ಯಾಂಕ್ ಇವುಗಳ ಕಾರ್ಯಗಳನ್ನು ವಿವರಿಸಿರಿ.
15. Explain the primary functions of a commercial bank.  
ಒಂದು ವಾಣಿಜ್ಯ ಬ್ಯಾಂಕಿನ ಪ್ರಾಥಮಿಕ ಕಾರ್ಯಗಳನ್ನು ವಿವರಿಸಿರಿ.
16. Explain the important principles of investment policy of a Bank.  
ಒಂದು ಬ್ಯಾಂಕಿನ ಹೂಡಿಕೆ ನೀತಿಯ ಪ್ರಮುಖವಾದ ತತ್ವಗಳನ್ನು ವಿವರಿಸಿರಿ.

Reg. No.

--	--	--	--	--	--	--	--	--	--

BCMCMC 155

**II Semester B.Com. Degree Examination, April/May 2019**

(Credit Based Semester Scheme)

(Common to all Batches)

**COMMERCE**

**Money and Public Finance**

Time : 3 Hours]

[Max. Marks : 80

SECTION - A/ವಿಭಾಗ - ಎ

Answer **any four** questions not exceeding 1½ pages :

(4 × 4 = 16)

ಯಾವುದಾದರೂ ನಾಲ್ಕು ಪ್ರಶ್ನೆಗಳಿಗೆ ಉತ್ತರಿಸಿ. ಉತ್ತರ 1½ ಪುಟಗಳನ್ನು ಮೀರಬಾರದು

1. Explain the various types of index numbers.

ಬೆಲೆ ಸೂಚ್ಯಂಕದ ವಿವಿಧ ವಿಧಗಳನ್ನು ವಿವರಿಸಿ.

2. What are the objectives of deficit financing?

ಕೊರತೆ ಧನ ವಿನಿಯೋಗದ ಉದ್ದೇಶಗಳಾವುವು?

3. Explain the components of public finance.

ಸಾರ್ವಜನಿಕ ಹಣಕಾಸಿನ ಭಾಗಗಳನ್ನು ವಿವರಿಸಿ.

4. Write a note on fiscal policy.

ರಾಜ್ಯಕೋಶ ನೀತಿಯ ಬಗ್ಗೆ ಲಘು ಟಿಪ್ಪಣಿ ಬರೆಯಿರಿ.

5. What are the effects of public debt?

ಸಾರ್ವಜನಿಕ ಸಾಲದ ಪರಿಣಾಮಗಳಾವುವು?

6. Briefly explain the impact of budget on the economy.

ಆರ್ಥಿಕತೆಯ ಮೇಲೆ ಮುಂಗಡ ಪತ್ರದ ಪರಿಣಾಮವನ್ನು ವಿವರಿಸಿ.



SECTION - B/ವಿಭಾಗ - ಬಿ

Answer **any four** questions not exceeding 3 pages :

(4 × 8 = 32)

ಯಾವುದಾದರೂ ನಾಲ್ಕು ಪ್ರಶ್ನೆಗಳಿಗೆ ಉತ್ತರಿಸಿ. ಉತ್ತರ 3 ಪುಟಗಳನ್ನು ಮೀರದಿರಲಿ :

7. Explain the circular flow of money in an economy.  
ಆರ್ಥಿಕತೆಯಲ್ಲಿ ಹಣದ ವರ್ತುಲಾಕಾರದ ಹರಿವನ್ನು ವಿವರಿಸಿ.
8. Distinguish between public finance and private finance.  
ಸಾರ್ವಜನಿಕ ಹಣಕಾಸು ಮತ್ತು ಖಾಸಗಿ ಹಣಕಾಸಿನ ನಡುವಿನ ವ್ಯತ್ಯಾಸವೇನು?
9. Explain the various methods of debt redemption.  
ಸಾರ್ವಜನಿಕ ಋಣ ವಿಮೋಚನೆಯ ವಿವಿಧ ವಿಧಾನಗಳನ್ನು ವಿವರಿಸಿ.
10. Explain the various heads of public expenditure.  
ಸಾರ್ವಜನಿಕ ವೆಚ್ಚದ ವಿವಿಧ ನಮೂನೆಗಳನ್ನು ವಿವರಿಸಿ.
11. Explain the types of public debt.  
ಸಾರ್ವಜನಿಕ ಸಾಲದ ವಿಧಗಳನ್ನು ವಿವರಿಸಿ.
12. Explain the various types of budget.  
ಮುಂಗಡ ಪತ್ರದ ವಿವಿಧ ವಿಧಗಳನ್ನು ವಿವರಿಸಿ.

SECTION - C/ವಿಭಾಗ - ಸಿ

Answer **any two** questions not exceeding 7 pages :

(2 × 16 = 32)

ಯಾವುದಾದರೂ ಎರಡು ಪ್ರಶ್ನೆಗಳಿಗೆ 7 ಪುಟಗಳು ಮೀರದಂತೆ ಉತ್ತರಿಸಿರಿ :

13. Define money. Explain the functions of money.  
ಹಣವನ್ನು ವ್ಯಾಖ್ಯಾನಿಸಿ. ಹಣದ ಕಾರ್ಯಗಳನ್ನು ವಿವರಿಸಿ.
14. What are index numbers? Explain the steps involved in the construction of index numbers. Construct a simple price index number.  
ಬೆಲೆ ಸೂಚ್ಯಂಕ ಎಂದರೇನು? ಸೂಚ್ಯಂಕದ ರಚನೆಯಲ್ಲಿ ಅನುಸರಿಸಬೇಕಾದ ಹಂತಗಳನ್ನು ವಿವರಿಸಿ. ಒಂದು ಸರಳ ಬೆಲೆ ಸೂಚ್ಯಂಕವನ್ನು ರಚಿಸಿ.
15. What is public revenue? Explain the various sources of public revenue.  
ಸಾರ್ವಜನಿಕ ಆದಾಯ ಎಂದರೇನು? ಸಾರ್ವಜನಿಕ ಆದಾಯದ ವಿವಿಧ ಮೂಲಗಳನ್ನು ವಿವರಿಸಿ.
16. What is deficit financing? Explain the merits and demerits of deficit financing.  
ಕೊರತೆ ಧನ ವಿನಿಯೋಗ ಎಂದರೇನು? ಕೊರತೆ ಧನ ವಿನಿಯೋಗದ ಒಳಿತು ಹಾಗೂ ಕೆಡುಕುಗಳನ್ನು ವಿವರಿಸಿ.